

## ANALYSE THE VIDEO “GEOGRAPHY: POPULATION”


(April 20th to 22nd)

You are doing a fantastic job. Congratulations!

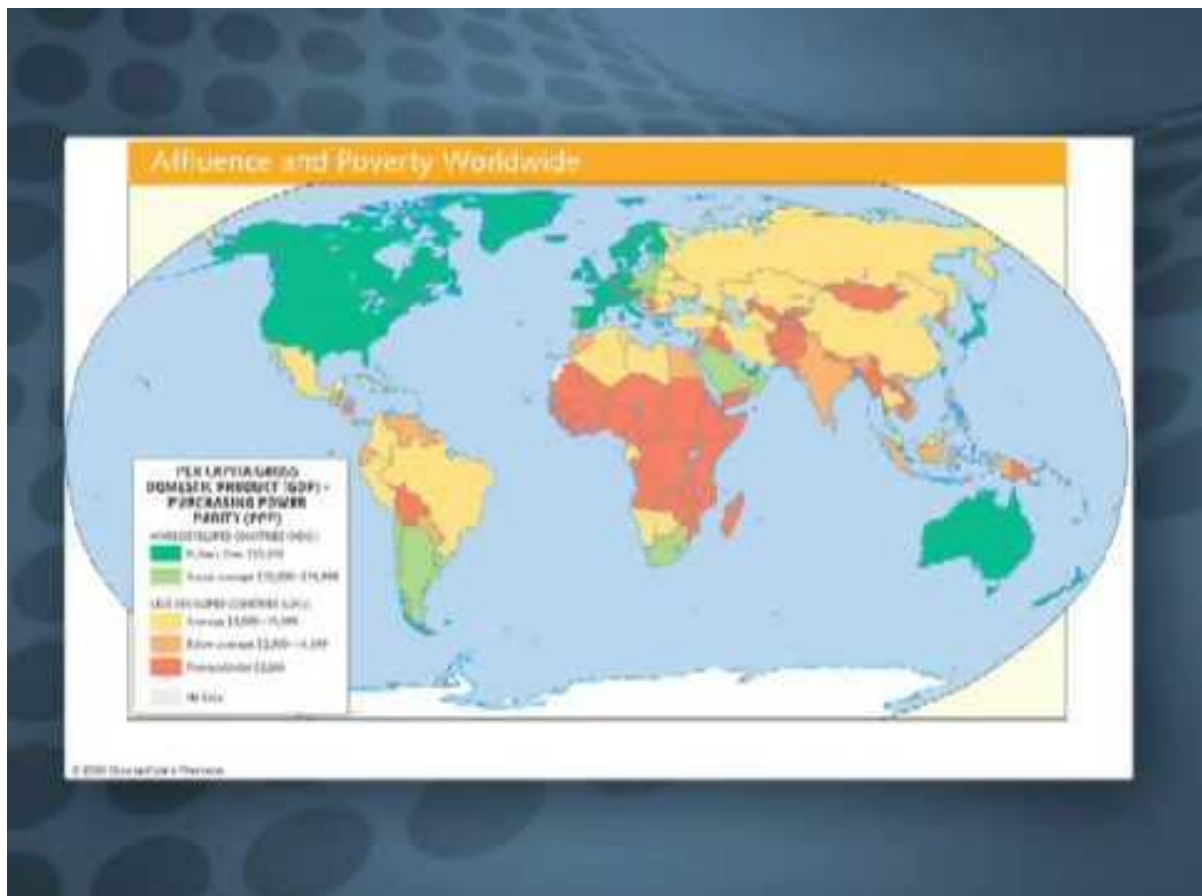
LET’S GO ON! TOGETHER IS BETTER!

(You can use [wordreference](#) and [spanishdict](#) in case you need help)

**You can change speed by clicking on Configuration and then reproduction speed (here you can choose 0,75 or 0,5). You can active subtitles as well.**

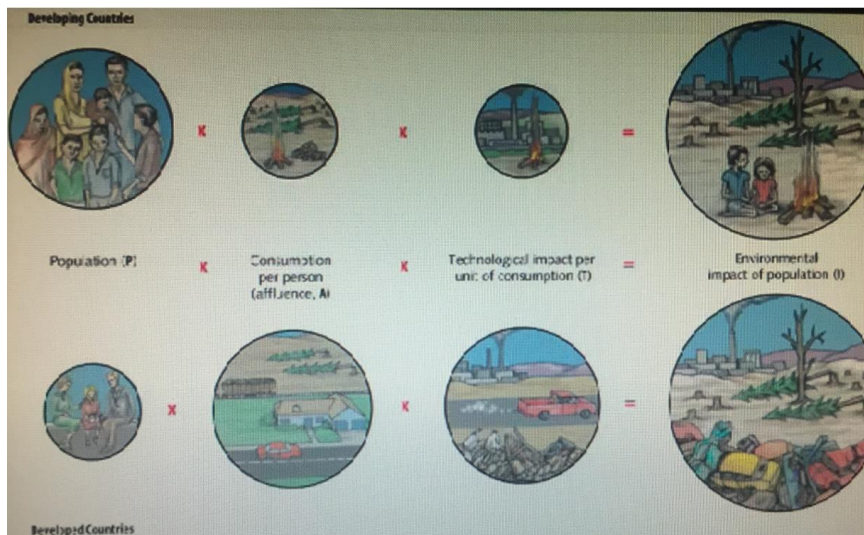
**Puedes cambiar la velocidad de reproducción en Configuración  si seleccionas velocidad de reproducción (aquí podrás elegir 0,75 o 0,5). También puedes activar los subtítulos.**

### GEOGRAPHY- POPULATION



- 1- What are some examples of relatively wealthy nations across our globe?  
They are mainly in the northern hemisphere: USA, Canada, Great Britain, Germany,...
- 2- Where are poorest nations located?  
They are located mainly in Africa and Asia.
- 3- Is there any relationship between population growth and wealth?  
Yes, there is.  
Growth rates are usually higher in poorer nations due to most of them rely on agriculture for survival and families typically have more children because they need more laborers to work the fields.  
On the other hand, wealthier societies typically have lower birth rates since children aren't necessary for basic survival.

4- What does the illustration demonstrate?



It demonstrates that there is a major difference in how developing and developed countries affect our environment.

- 5- How population has grown over time? (Describe the evolution from Agriculture Revolution to 2062)
  - Agriculture Revolution - 10,000 years ago: 5.3 Million
  - 1800: 1 Billion
  - 1930: 2 Billion
  - 1975: 4 Billion
  - 1999: 6 Billion
  - 2008: 6.5 Billion
  - 2062: 13 Billion