

## CHECK YOUR PROGRESS

### (SOCIAL SCIENCE REVIEW-UNITS 4, 5, 6)

Let's check your progress. Copy and write in your notebook. **YOU CAN GET AN EXTRA MARK IF YOU SEND THE ANSWERS ON TIME.**

Comprobemos cómo habéis avanzado. Copia y escribe en tu cuaderno. **PUNTO EXTRA SI ENVIÁIS LA TAREA A TIEMPO.**

.....

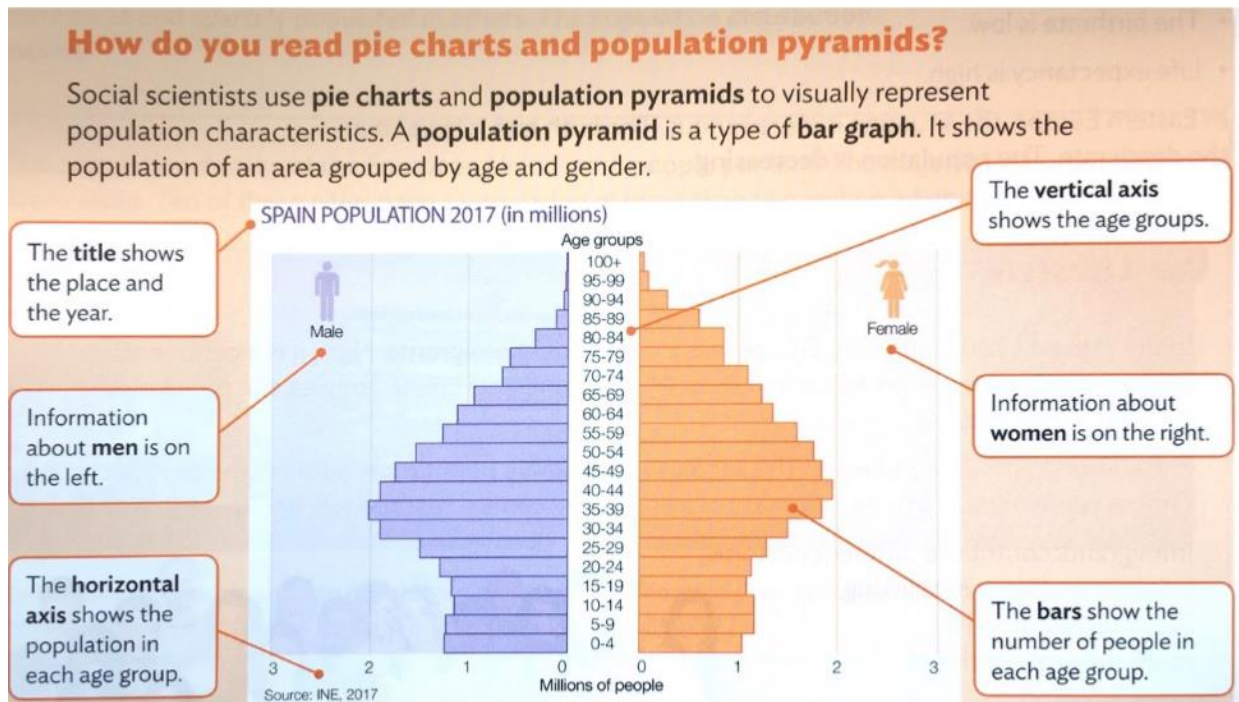
- 1- **The layer of the atmosphere closest to de Earth's surface is...**
  - a- The stratosphere.
  - b- The ozone layer.
  - c- The troposphere.
- 2- **The predominant climate in Spain is...**
  - a- Mediterranean.
  - b- Oceanic.
  - c- Subtropical.
- 3- **The climate in the Canary Islands is...**
  - a- Subtropical.
  - b- Mountainous.
  - c- Mediterranean.
- 4- **Plants like dragon trees and laurel forests are from...**
  - a- Oceanic climates.
  - b- Mediterranean climates.
  - c- Subtropical climates.
- 5- **If we calculate the number of people who live in one square kilometre, it is...**
  - a- The natural growth of an area.
  - b- The number of people who live there.
  - c- The population density.
- 6- **In most regions of Spain, the population is denser in...**
  - a- The villages.
  - b- The cities.
  - c- The interior.
- 7- **The difference between the number of immigrants and emigrants in a place is called...**
  - a- Mortality.
  - b- The migration rate.
  - c- Natural growth.
- 8- **The European Commission is the...**
  - a- Parliament of Europe.
  - b- Governing body of Europe.
  - c- Courts of Justice of Europe.
- 9- **The European Court of Justice has its headquarters in...**
  - a- Strasbourg.
  - b- Brussels.
  - c- Luxembourg

**10- In the Eurozone there are...**

- a- 20 member countries, including Spain.
- b- 18 member countries, including Spain.
- c- 22 member countries, including Spain.

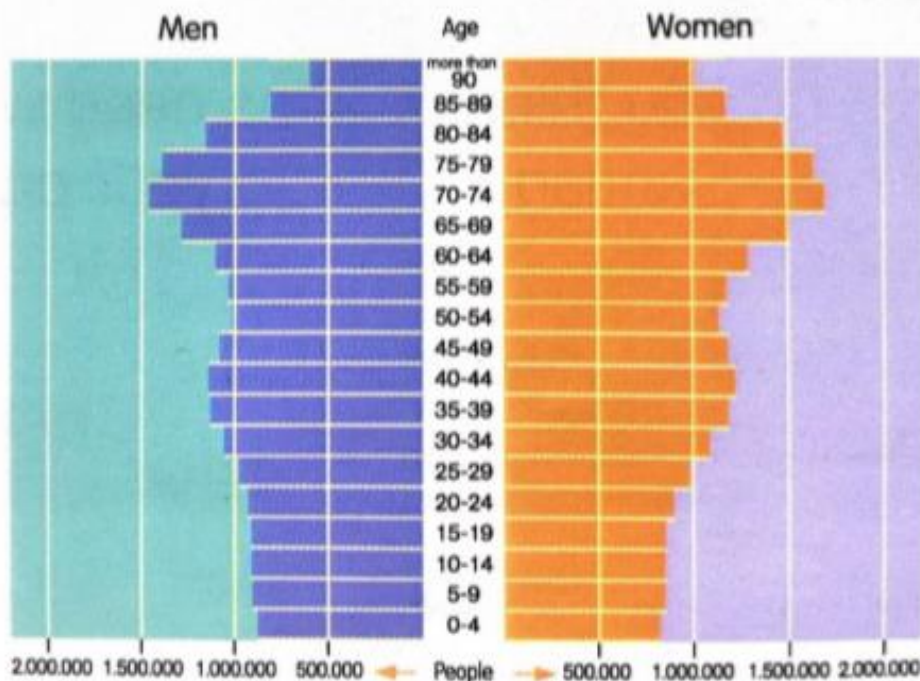
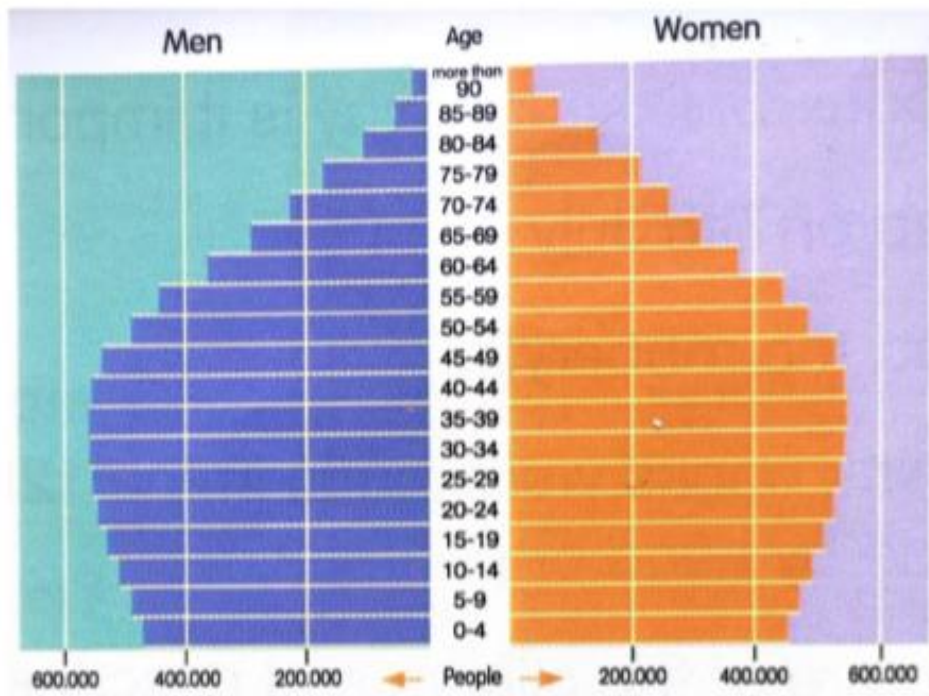
**11- Think like a geographer.**

**. Look at the following explanation.**



- a- What does the title show?
- b- What does the horizontal axis show?
- c- What does the vertical axis show?
- d- What do the bars show?
- e- What's the information on the left about? And on the right?

**. Read the information. Then look at the pyramids and answer the questions**  
 The population of a country is considered as ageing when 15 out of every 100 inhabitants are older than 65. In Spain, 18 out of every 100 inhabitants are over 65. Life expectancy in Spain is increasing. The birth rate in Spain is low.



**a- What will be the population pyramid of Spain look like in the future? Choose one of the pyramids and explain why you think it is the correct pyramid**