

1. Choose the correct word:


Mountains beaches plains cliffs valleys plateaus

- 1. A coastal landscape has _____ and _____.
- 2. A flat landscape has _____ and _____.
- 3. A mountain landscape has _____ and _____.

2. What natural and man-made features can you see in the different landscapes? Complete:

Natural features:	
Man-made features:	

3. Label the mountain: (foot, peak, slope)




4. Circle the correct response:



Is this a coastal or inland feature? It's a... coastal feature / inland feature.

Is it natural or man-made? It's... natural / man-made.

lighthouse



Is this a coastal or inland feature?

It's a... coastal feature / inland feature.

Is it natural or man-made?

It's... natural / man-made.

mountain range




Is this a coastal or inland feature? It's a... coastal feature / inland feature.

Is it natural or man-made?

It's... natural / man-made.

bridge



Is this a coastal or inland feature?

It's a... coastal feature / inland feature.

Is it natural or man-made?

It's... natural / man-made.

cliff



Is this a coastal or inland feature?

It's a... coastal feature / inland feature.

Is it natural or man-made?

It's... natural / man-made.

beach